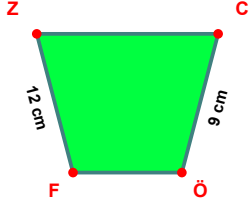
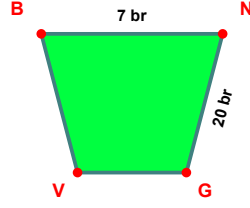


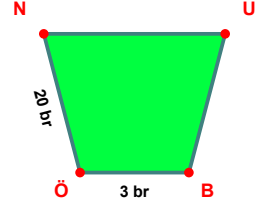
**SORU:** Aşağıdaki şekillerde verilen, kenar uzunlukları farklarını bulunuz.



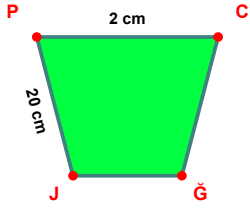
$$|ZF| - |CÖ| = \dots\dots\dots$$



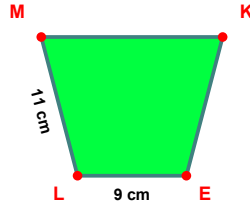
$$|NG| - |BN| = \dots\dots\dots$$



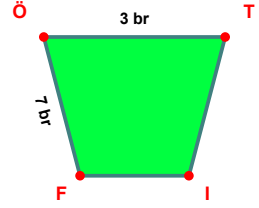
$$|ÖN| - |BÖ| = \dots\dots\dots$$



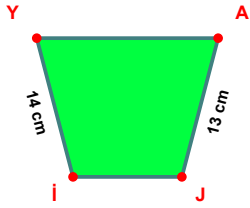
$$|JP| - |PC| = \dots\dots\dots$$



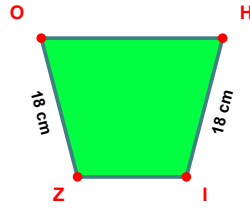
$$|LM| - |EL| = \dots\dots\dots$$



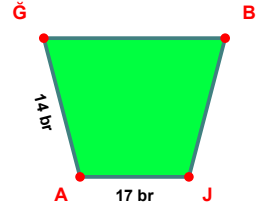
$$|FÖ| - |ÖT| = \dots\dots\dots$$



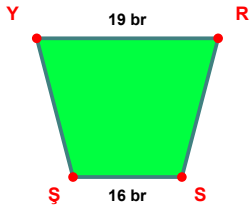
$$|Yİ| - |AJ| = \dots\dots\dots$$



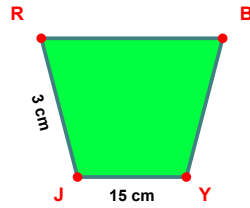
$$|HI| - |ZO| = \dots\dots\dots$$



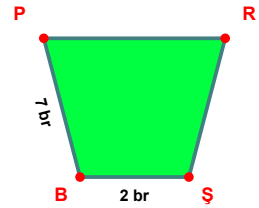
$$|JA| - |AĞ| = \dots\dots\dots$$



$$|YR| - |ŞS| = \dots\dots\dots$$

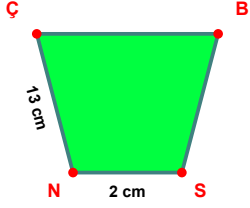


$$|YJ| - |JR| = \dots\dots\dots$$

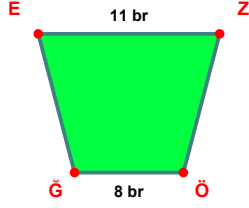


$$|BP| - |ŞB| = \dots\dots\dots$$

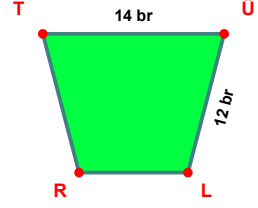
**SORU:** Aşağıdaki şekillerde verilen, kenar uzunlukları farklarını bulunuz.



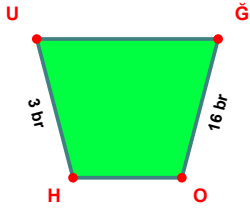
$$|ÇN| - |SN| = \dots\dots\dots$$



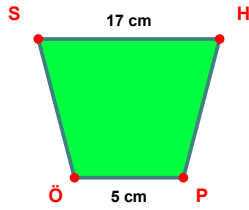
$$|EZ| - |ÖG| = \dots\dots\dots$$



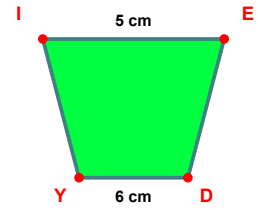
$$|TÜ| - |ÜL| = \dots\dots\dots$$



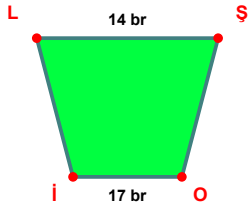
$$|GO| - |HU| = \dots\dots\dots$$



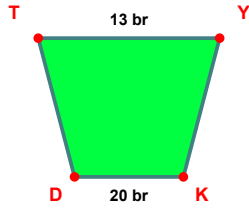
$$|SH| - |PÖ| = \dots\dots\dots$$



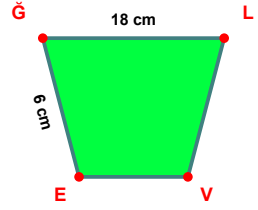
$$|DY| - |IE| = \dots\dots\dots$$



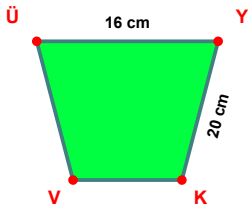
$$|OI| - |LŞ| = \dots\dots\dots$$



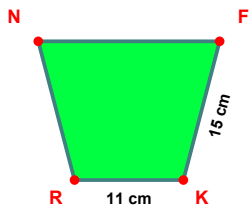
$$|KD| - |TY| = \dots\dots\dots$$



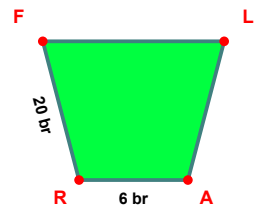
$$|GL| - |EG| = \dots\dots\dots$$



$$|YK| - |ÜY| = \dots\dots\dots$$



$$|FK| - |KR| = \dots\dots\dots$$



$$|RF| - |AR| = \dots\dots\dots$$

SÜREÇ ODAKLI DEĞERLENDİRME ÖLÇEĞİ

Doğru Sayısı: ..... / 24

Öğretmen ilgili kutucuğu işaretler.

Geliştirilmeli (0-8)

İyi (9-14)

Çok İyi (15-20)

Mükemmel (21-24)

☐☐☐☐

Hazırlayan: .....

Bu bölüme sınıfınızın ilgili kazanıma yönelik genel durumuna ilişkin gözlem ve izlenimlerinizi, öğrencilerinizin bu kazanımla ilgili öğrenme eksikliklerini ve bu eksikliklerin giderilmesi amacıyla yaptığınız/yapmayı planladığınız faaliyetleri not edebilirsiniz.

No	Adı - Soyadı	Toplam Puan	Değerlendirme
1			
2			
3			
4			
5			
6			
7			
8			
9			
10			
11			
12			
13			
14			
15			
16			
17			
18			
19			
20			
21			
22			
23			
24			
25			
26			
27			
28			
29			
30			
31			
32			
33			
34			
35			

Hazırlayan: .....